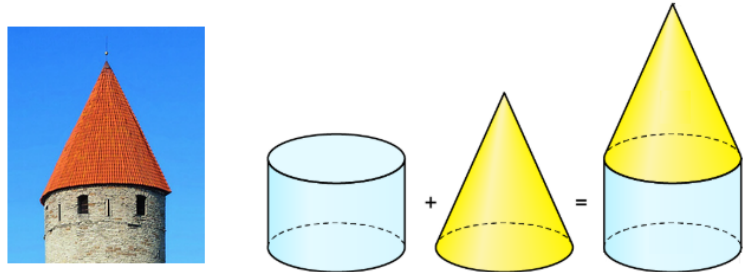





**Aufgabe 1**

Aus welchen Körpern bestehe ich?

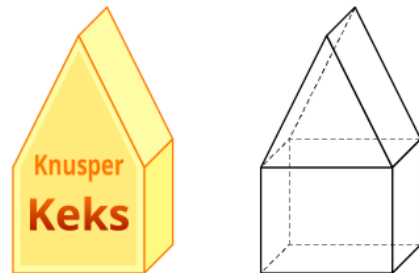
a) Zylinder  
Kegel



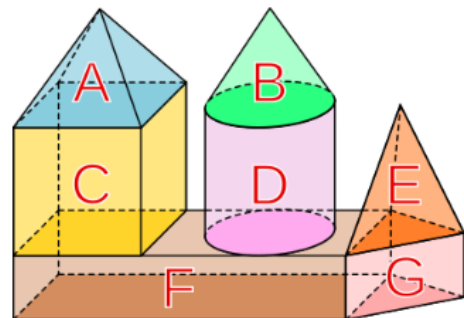
b) Quader,  
Würfel



c) Wüfer,  
Prisma



d) Prisma, Kegel,  
Würfel, Zylinder,  
Quader, Pyramide



e) Prisma Pyramide,  
Würfel, Quader

