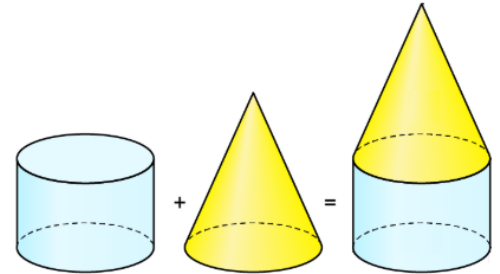




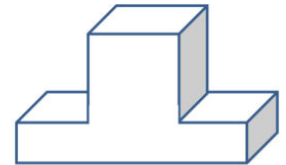
Aufgabe 1

Aus welchen Körpern bestehe ich?

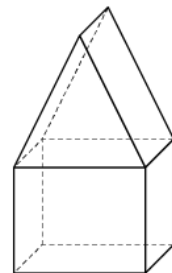
a) Zylinder und Kegel (= Turm)



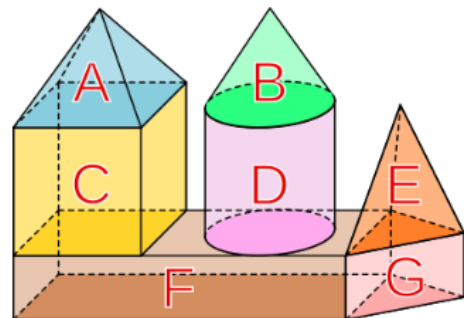
b) Quader und Quadrat = Trapez



c) Quadrat und Dreieck = Haus



d) Quader, Prisma, Zylinder, Quadrat, Pyramide = Wild



e) Pyramide, Pyramide, Prisma, Quader, Quader, halbkreis = Burck

