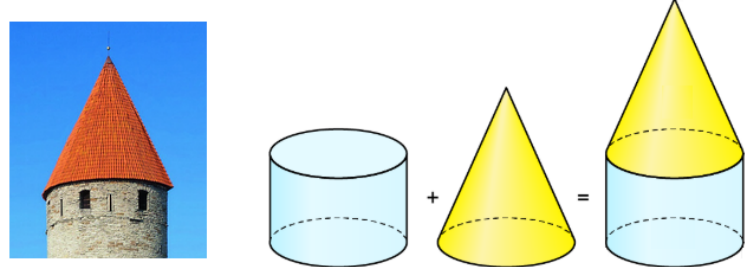





Aufgabe 1

Aus welchen Körpern bestehe ich?

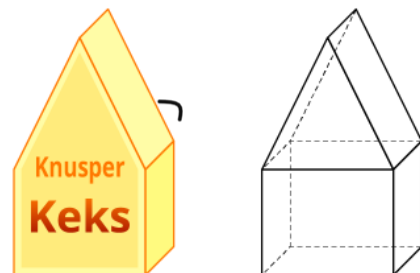
a) Kegel
Zylinder



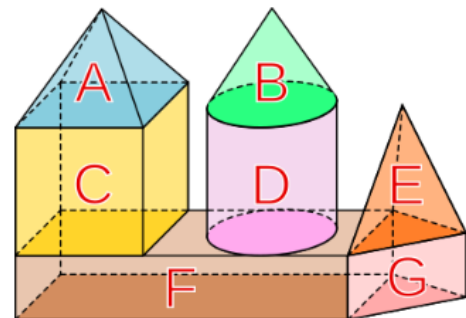
b) Würfel
Quadrat



c) Dreiecksprisma
Quadrat



d) Pyramide
Quadrat
Dreieck
Halbkreis



e) Pyramide
Dreiecksprisma
Quadrat
Halber Kreis

