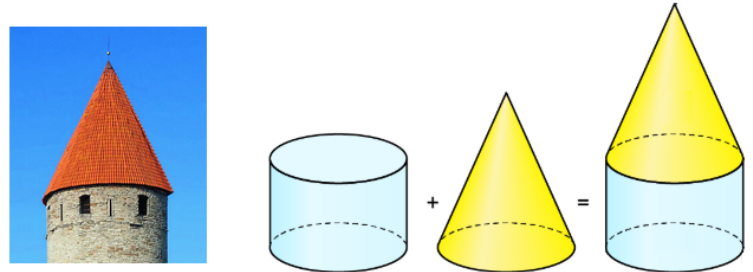





Aufgabe 1

Aus welchen Körpern bestehe ich?

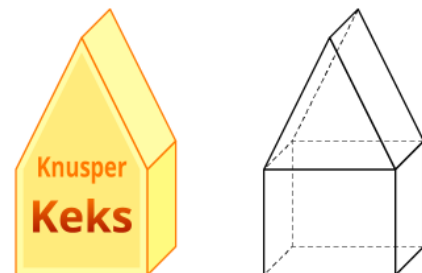
a) Kegel
Zylinder



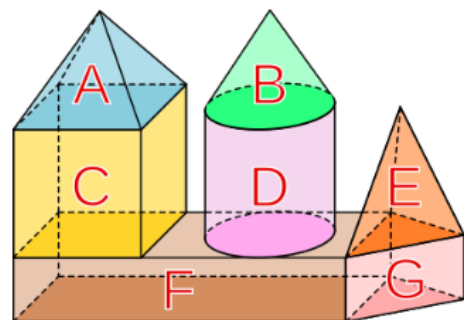
b) Quader
Würfel



c) Prisma
Würfel



d) A Pyramide, B Kegel,
C Würfel, D Zylinder,
E Pyramide, F Quader
G Prisma



e) _____

