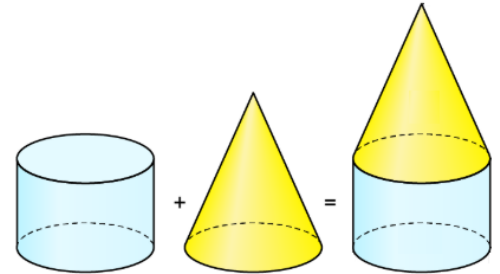




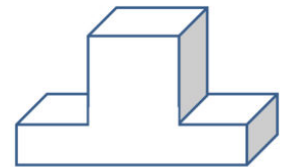
Aufgabe 1

Aus welchen Körpern bestehe ich?

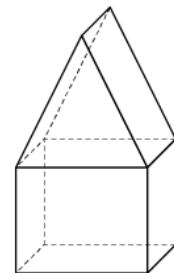
a) Zylinder, Kegel



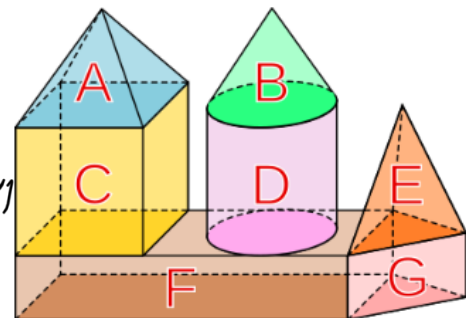
b) Quader, Würfel



c) Würfel, Pyramide



d) Pyramide, Würfel, Kegel, Zylinder, dreieck Pyramide, Quader, Prisma



e) Pyramide, Prisma, Pyramide, Bogen

